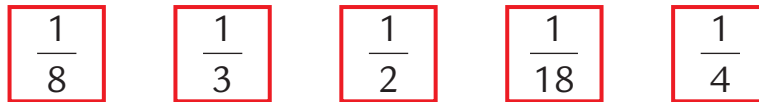
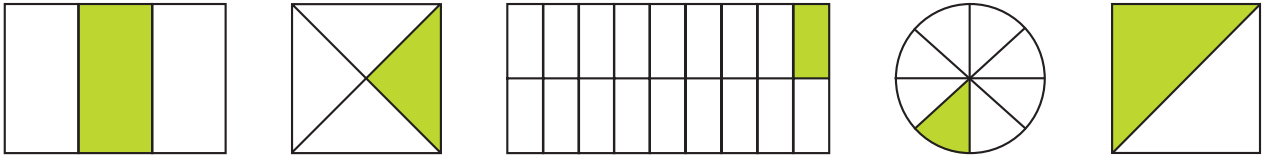
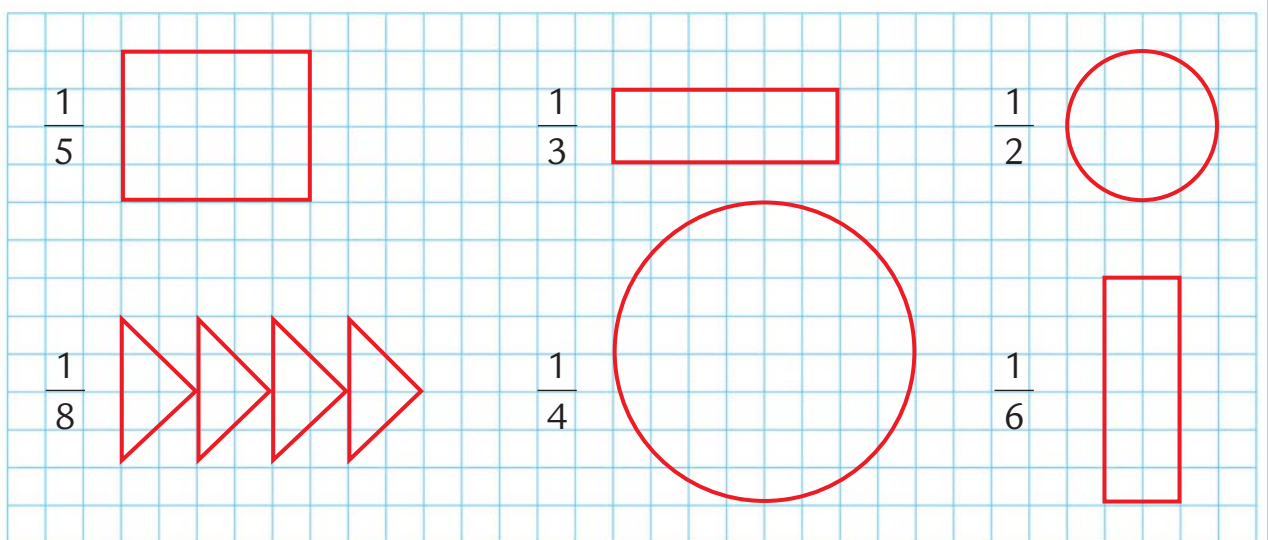


## Frazioni e unità frazionarie


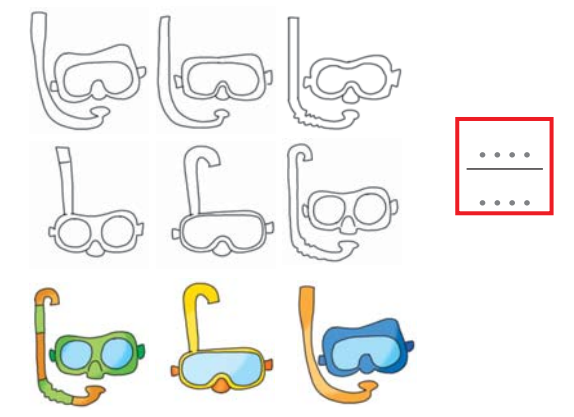
**1** Collega ogni **unità frazionaria** alle figure che la rappresentano.



**2** Colora e indica, in ogni disegno, la parte che corrisponde all'**unità frazionaria** indicata.



**3** Osserva i gruppi di oggetti e scrivi la frazione corrispondente a quelli colorati.




## Frazioni a confronto

**1** Confronta le coppie di frazioni utilizzando i segni  $>$ ,  $<$ ,  $=$ .

$$\frac{7}{10} \dots \frac{5}{10} \qquad \frac{3}{15} \dots \frac{11}{15} \qquad \frac{10}{19} \dots \frac{19}{19}$$

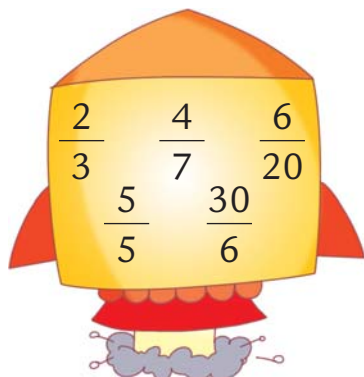
$$\frac{4}{13} \dots \frac{2}{13} \qquad \frac{6}{18} \dots \frac{2}{18} \qquad \frac{15}{33} \dots \frac{17}{33}$$

**2** Colora dello stesso colore le **frazioni equivalenti** contenute nei barattoli portamatite.




**3** Cancella con **X** le frazioni che si trovano nella navicella spaziale non adatta.

**PROPRIE**



**IMPROPRIE**



**APPARENTI**

